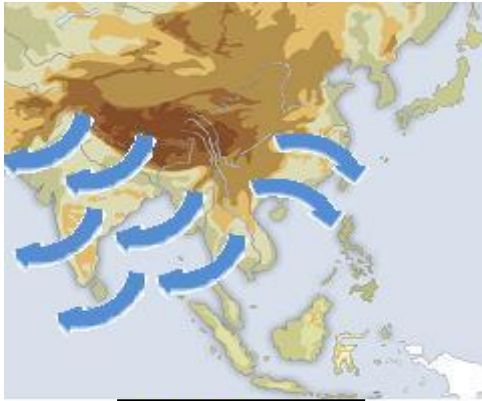
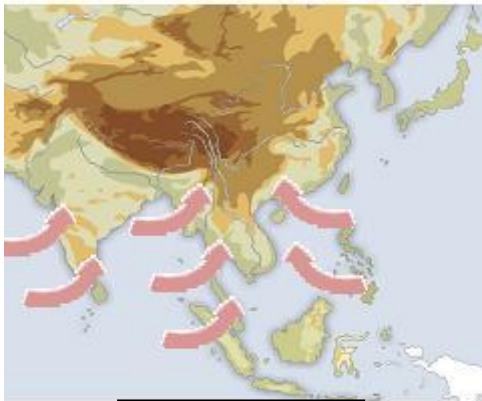


# LANDSCAPES AND CLIMATES IN CHINA



**WINTER**



**SUMMER**

1- Look at these maps and the arrows. What direction do arrows go to? \_\_\_\_\_  
 \_\_\_\_\_  
 \_\_\_\_\_  
 \_\_\_\_\_

2- Look at the picture and answer: When did it happen? and Why do you think so? \_\_\_\_\_  
 \_\_\_\_\_



3-Look at these maps and colour them. How? Match climates and their landscapes with the same colour.






4- Look at these pictures:

a) Match every picture with these words:

- Deciduous forest of Magnolias – Gobi’s desert – Himalaya –Bamboo forest.



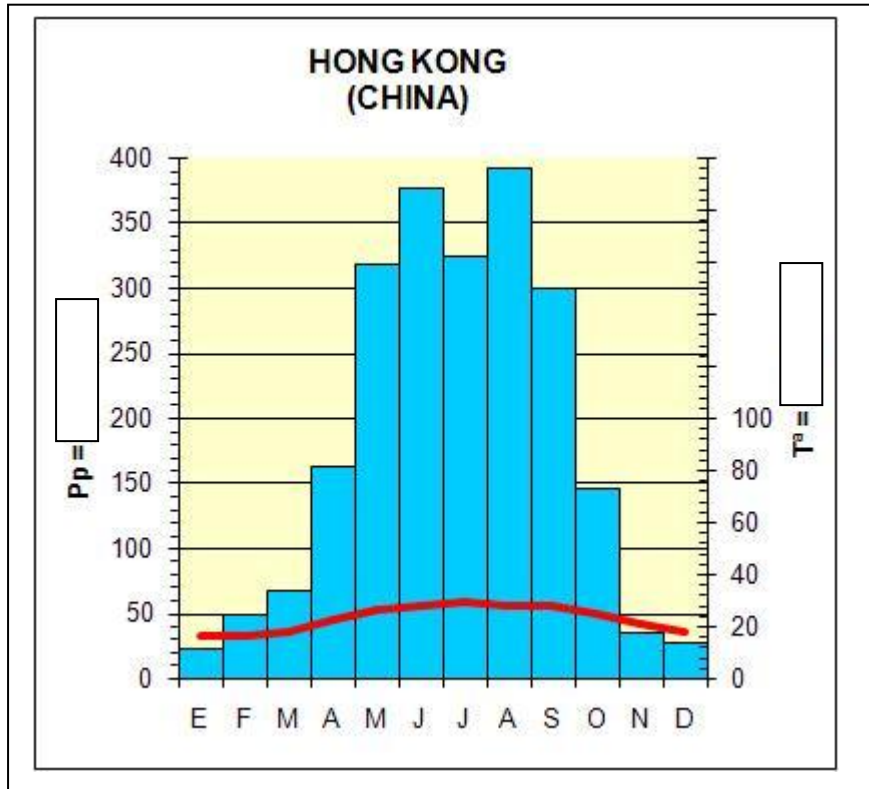
b) Match every picture with its landscape.

c) Homework: Do a little composition about these landscapes. You are travelling around China . Write your journey about these four landscapes.(10 lines , help you with internet)

d) Which picture do you prefer? Why?

5- Explain this climate-graph:

- a) Total mm
- b) Month of maxims rainfalls with Mm
- c) Month of minims rainfalls with Mm
- d) Annual average (Temperature)
- e) Thermal annual oscillation
- f) The Hottest month with °C
- g) The Coldest month with °C
- h) What kind of climate is? Look at the map about climates in the previous page .



Bibliography:

<http://www.adevaherranz.es/GEOGRAFIA/GEOGRAFIA%20UNIVERSAL%20Paises/Asia/China/CHINA.htm#F%C3%ADsica%20China%20Clima%20Abajo>

[http://contenidos.educarex.es/sama/2010/csociales\\_geografia\\_historia/primeroeso/tema3/vi ento.html](http://contenidos.educarex.es/sama/2010/csociales_geografia_historia/primeroeso/tema3/vi ento.html)

<http://www.chinamaps.org/china/china-land-cover-map.html>